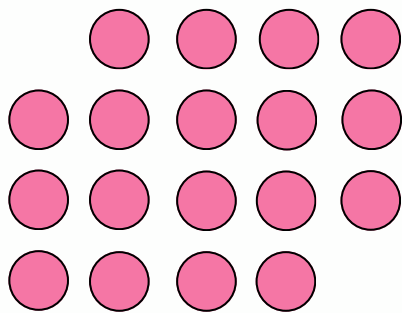
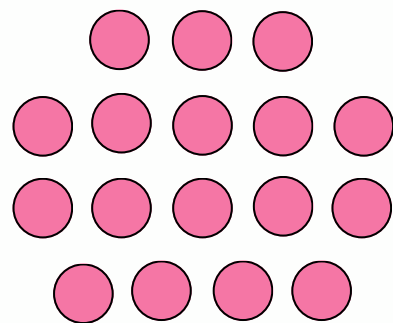


## 1st grade: Subtraction

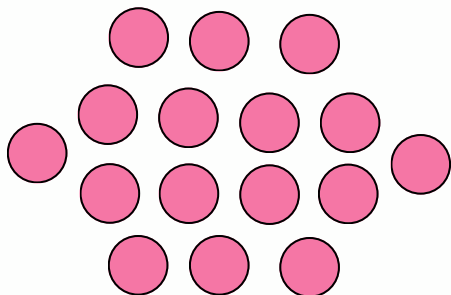
Count the objects, cross out the objects to subtract, and write the difference



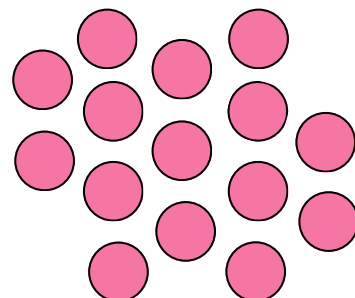
$$18 - 14 = \underline{\quad}$$



$$17 - 8 = \underline{\quad}$$



$$16 - 13 = \underline{\quad}$$



$$15 - 6 = \underline{\quad}$$