



## 1st grade: Subtraction


Count the objects, cross out the objects to subtract, and write the difference



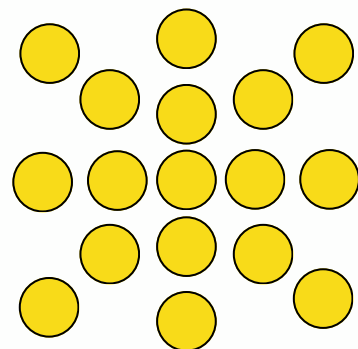
$$20 - 17 = \underline{\quad}$$



$$19 - 6 = \underline{\quad}$$



$$18 - 9 = \underline{\quad}$$



$$17 - 11 = \underline{\quad}$$