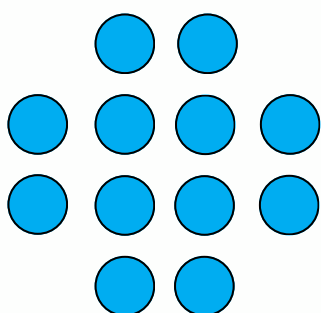



1st grade: Subtraction

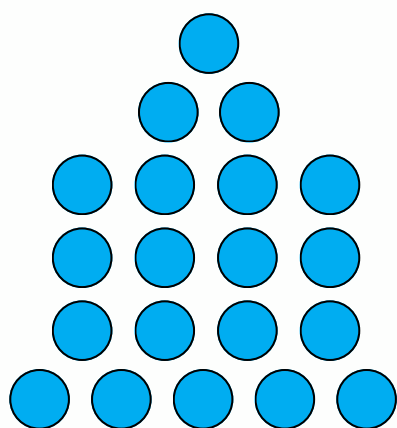
Count the objects, cross out the objects to subtract, and write the difference




$12 - 5 = \underline{\quad}$



$11 - 1 = \underline{\quad}$



$20 - 13 = \underline{\quad}$



$19 - 10 = \underline{\quad}$