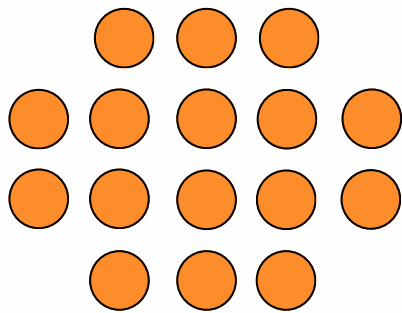
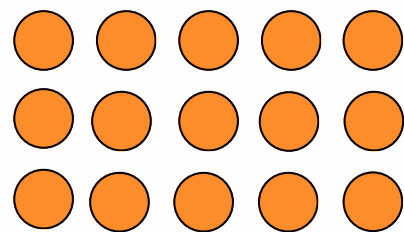


## 1st grade: Subtraction

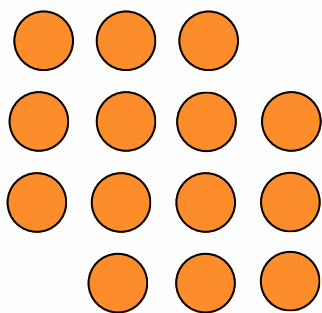
Count the objects, cross out the objects to subtract, and write the difference



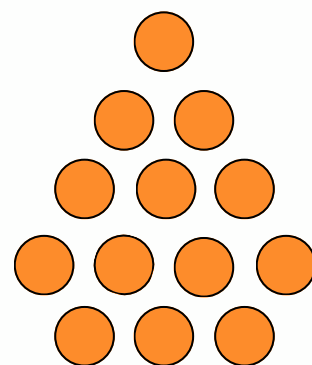
$$16 - 4 = \underline{\quad}$$



$$15 - 10 = \underline{\quad}$$



$$14 - 7 = \underline{\quad}$$



$$13 - 2 = \underline{\quad}$$