


Subtracting Double Digits Vertical 1C




1st grade: Subtraction


Find the difference



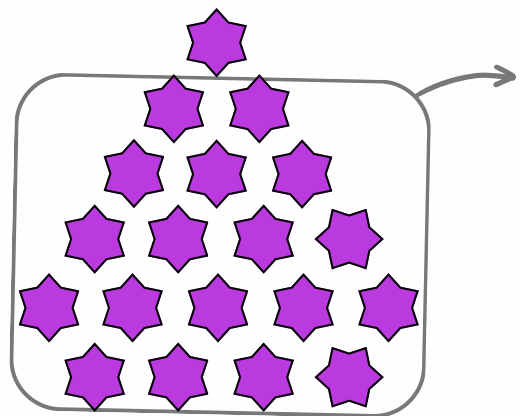
$$12 - 5 = \underline{\quad}$$



$$11 - 3 = \underline{\quad}$$



$$20 - 16 = \underline{\quad}$$



$$19 - 18 = \underline{\quad}$$