



1st grade: Subtraction

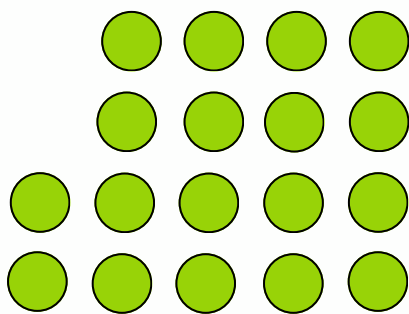
Count the objects, cross out the objects to subtract, and write the difference




$$20 - 15 = \underline{\quad}$$



$$19 - 11 = \underline{\quad}$$



$$18 - 12 = \underline{\quad}$$



$$17 - 14 = \underline{\quad}$$