


Subtracting Single Digits with Objects 1A



1st grade: Subtraction

Count the objects, cross out the objects to subtract, and write the difference




$$10 - 0 = \underline{\quad}$$

Total: _____



$$9 - 1 = \underline{\quad}$$

Total: _____




$$8 - 2 = \underline{\quad}$$

Total: _____




$$7 - 3 = \underline{\quad}$$

Total: _____



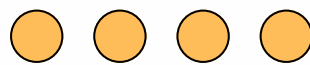
$$6 - 4 = \underline{\quad}$$

Total: _____



$$5 - 3 = \underline{\quad}$$

Total: _____




$$4 - 2 = \underline{\quad}$$

Total: _____



$$3 - 1 = \underline{\quad}$$

Total: _____



$$2 - 0 = \underline{\quad}$$

Total: _____



$$1 - 0 = \underline{\quad}$$

Total: _____