


# Horizontal Times Table with objects: 4




## 2nd grade: Multiplication

Say and trace the times table


$$4 \times 1 = 4$$




$$4 \times 2 = 8$$



$$4 \times 3 = 12$$




$$4 \times 4 = 16$$




$$4 \times 5 = 20$$




$$4 \times 6 = 24$$



$$4 \times 7 = 28$$



$$4 \times 8 = 32$$



$$4 \times 9 = 36$$



$$4 \times 10 = 40$$





## 2nd grade: Multiplication

### Answer page

#### List of Answers

$$4 \times 1 = 4$$

$$4 \times 2 = 8$$

$$4 \times 3 = 12$$

$$4 \times 4 = 16$$

$$4 \times 5 = 20$$

$$4 \times 6 = 24$$

$$4 \times 7 = 28$$

$$4 \times 8 = 32$$

$$4 \times 9 = 36$$

$$4 \times 10 = 40$$