

Horizontal Times Table with objects: 2



2nd grade: Multiplication

Say and trace the times table

$2 \times 1 = 2$



$2 \times 2 = 4$



$2 \times 3 = 6$




$2 \times 4 = 8$




$2 \times 5 = 10$




$2 \times 6 = 12$




$2 \times 7 = 14$




$2 \times 8 = 16$



$2 \times 9 = 18$



$2 \times 10 = 20$





2nd grade: Multiplication

Answer page

List of Answers

$$2 \times 1 = 2$$

$$2 \times 2 = 4$$

$$2 \times 3 = 6$$

$$2 \times 4 = 8$$

$$2 \times 5 = 10$$

$$2 \times 6 = 12$$

$$2 \times 7 = 14$$

$$2 \times 8 = 16$$

$$2 \times 9 = 18$$

$$2 \times 10 = 20$$