
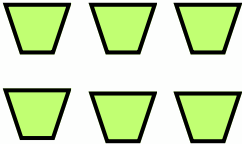


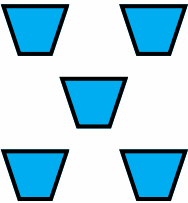
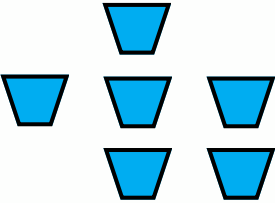
# Adding Single Digits with Objects 1J



## 1st grade: Addition

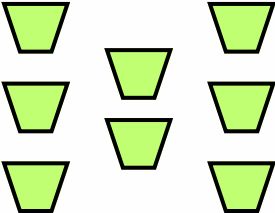

Count the objects, write the numbers, and add to find sum.

 $+$  $=$   
\_\_\_\_\_ + \_\_\_\_\_ = \_\_\_\_\_

 $+$  $=$   
\_\_\_\_\_ + \_\_\_\_\_ = \_\_\_\_\_

$+$   $6 + 6 =$  \_\_\_\_\_

$+$   $7 + 6 =$  \_\_\_\_\_

 $+$  $=$   
\_\_\_\_\_ + \_\_\_\_\_ = \_\_\_\_\_

$+$   $9 + 6 =$  \_\_\_\_\_