

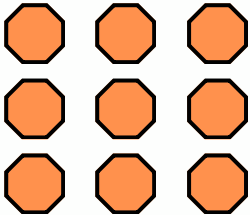
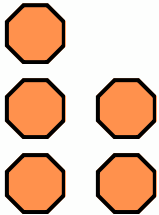
Adding Single Digits with Objects 1I



1st grade: Addition


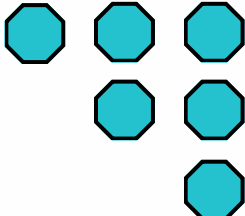
Count the objects, write the numbers, and add to find sum.

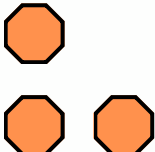
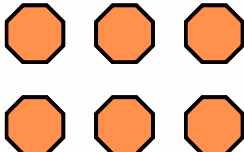
$$+ \quad 8 + 5 = \underline{\quad}$$

	+				
				$\underline{\quad} + \underline{\quad} = \underline{\quad}$	

$$+ \quad 0 + 6 = \underline{\quad}$$

$$+ \quad 1 + 6 = \underline{\quad}$$

	+				
				$\underline{\quad} + \underline{\quad} = \underline{\quad}$	

	+				
				$\underline{\quad} + \underline{\quad} = \underline{\quad}$	