
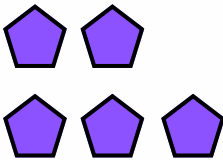



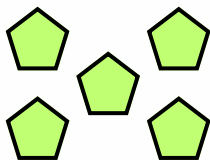
Adding Single Digits with Objects 1H



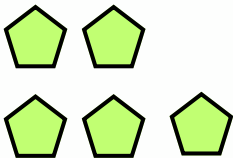
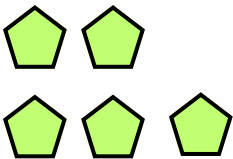
1st grade: Addition

Count the objects, write the numbers, and add to find sum.

 +  $\underline{\quad} + \underline{\quad} = \underline{\quad}$

 +  $\underline{\quad} + \underline{\quad} = \underline{\quad}$

+ $4 + 5 = \underline{\quad}$

 +  $\underline{\quad} + \underline{\quad} = \underline{\quad}$

+ $6 + 5 = \underline{\quad}$

+ $7 + 5 = \underline{\quad}$