


# Adding Single Digits with Objects 1G




## 1st grade: Addition

Count the objects, write the numbers, and add to find sum.




+




$$\underline{\quad} + \underline{\quad} = \underline{\quad}$$

+

$$7 + 4 = \underline{\quad}$$



+



$$\underline{\quad} + \underline{\quad} = \underline{\quad}$$

+


$$9 + 4 = \underline{\quad}$$

+

$$0 + 5 = \underline{\quad}$$



+



$$\underline{\quad} + \underline{\quad} = \underline{\quad}$$