

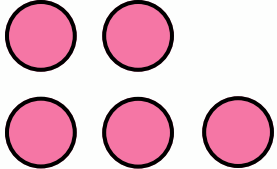
# Adding Single Digits with Objects 1E




## 1st grade: Addition


Count the objects, write the numbers, and add to find sum.


$$+ \quad 4 + 3 = \underline{\quad}$$


$$+ \quad \begin{array}{c} \text{pink circle} \\ \text{pink circle} \quad \text{pink circle} \end{array} \quad \underline{\quad} + \underline{\quad} = \underline{\quad}$$


$$+ \quad \begin{array}{c} \text{purple circle} \\ \text{purple circle} \quad \text{purple circle} \end{array} \quad \underline{\quad} + \underline{\quad} = \underline{\quad}$$

$$+ \quad 7 + 3 = \underline{\quad}$$


$$+ \quad \begin{array}{c} \text{purple circle} \quad \text{purple circle} \\ \text{purple circle} \end{array} \quad \underline{\quad} + \underline{\quad} = \underline{\quad}$$


$$+ \quad \begin{array}{c} \text{pink circle} \\ \text{pink circle} \quad \text{pink circle} \end{array} \quad \underline{\quad} + \underline{\quad} = \underline{\quad}$$